

③ 角的初步认识

第1课时 认识角

1. 细心算一算。

$37 + 50 =$

$26 + 70 =$

$47 - 27 =$

$42 + 40 =$

$87 + 5 =$

$15 + 24 =$

$22 + 68 =$

$72 - 37 =$

$48 - 26 =$

$45 + 17 =$

$66 + 9 =$

$71 - 24 =$

$31 - 6 =$

$17 + 28 =$

$26 + 18 =$

$75 - 56 =$

$36 - 27 =$

$52 + 27 =$

$87 - 62 =$

$13 + 26 =$

$35 + 47 =$

$23 + 42 - 35 =$

$54 - 6 - 15 =$

$15 + 72 - 44 =$

$81 + 18 - 22 =$

$57 - (34 + 18) =$


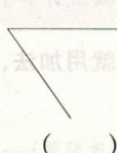
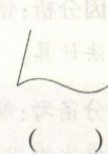
$62 + 19 + 9 =$

$95 - 37 - 27 =$

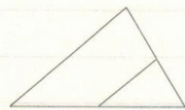
$9 + (40 - 25) =$

$50 + 26 - 47 =$


2. (教材 P43, T2 高仿题) 下面的图形中, 是角的画“√”, 不是角的画“×”。



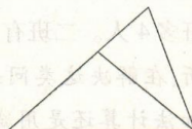
3. (教材 P43, T3 高仿题) 下面的图形中各有几个角?



() 个角



() 个角



() 个角