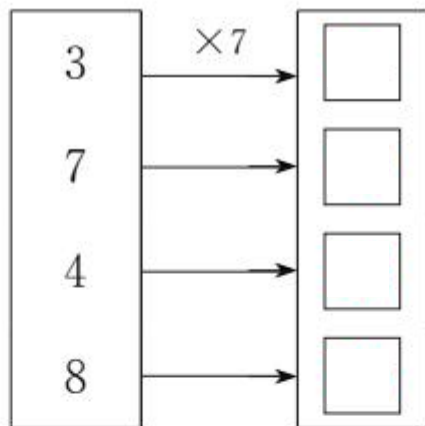
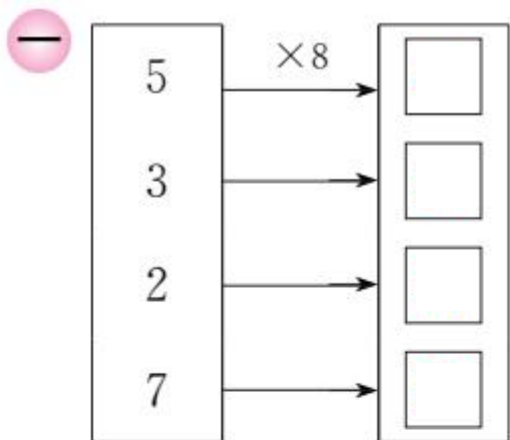





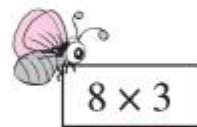
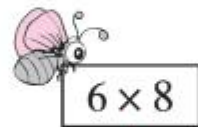
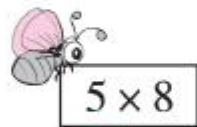





第 4 课时 练习课 [教材 P_{76~77}]



二 小蜜蜂采花蜜。(连一连)



三 下面每组算式卡片的得数都相等,请在括号里填上合适的数。

3×8

$(\quad) \times 8$

$(\quad) \times 8$

$(\quad) \times 8 + 8$

$8 \times 8 - 8$

$4 \times 8 + 8$

$(\quad) \times 8 - 8$

$(\quad) \times 8 + 8$

$(\quad) \times 8 - 8$

四





一共有
几枝花?



快乐提升

五



根据上图你能提出什么数学问题? 你会解答吗?