



第 7 课时 减法(教材第 26~27 页)



开心！一练

一 划一划，填一填。



$3 - 2 = \square$



$4 - 3 = \square$




$4 - \square = \square$




$5 - \square = \square$

二 1.




$5 - \square = \square$




$5 - \square = \square$

2.



$5 - \square = \square$



$5 - \square = \square$

三 算一算。

$4 - 3 =$

$5 - 4 =$

$5 - 3 =$

$5 - 1 =$

$3 - 2 =$

$4 - 2 =$

$4 - 1 =$

$5 - 2 =$



快乐提升

四 看图列式计算。

1.




$5 - \square = \square$

2.



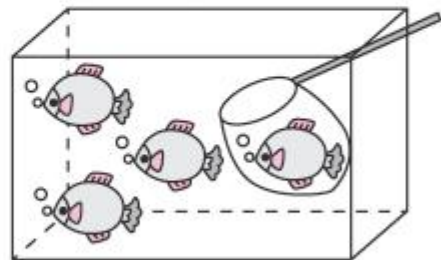
$3 - \square = \square$

3.



$\square - \square = \square$

4.



$\square - 1 = \square$