







第 9 课时 0 的认识和有关 0 的加减法(教材第 30 页)



开心! 一练

一 数苹果, 写数字。



二 看图写一写, 算一算。

○ ○ ○ ~~○~~ $4 - \square = \square$

○ ○ ~~○~~ ~~○~~ $4 - \square = \square$

○ ~~○~~ ~~○~~ ~~○~~ $\square - \square = \square$

~~○~~ ~~○~~ ~~○~~ ~~○~~ $\square - \square = \square$

三 算一算。

$0+4=$

$0+3=$

$5-0=$

$4-4=$

$2-0=$


$5+0=$

$3-3=$

$2-2=$


四 看图写算式。

1.



$5 + \square = \square$

2.




$\square + 5 = \square$




快乐!提升


五 池塘里还有几只鸭子在游泳?



$$5 - \square = \square$$



$$\square - \square = \square$$



$$\square - \square = \square$$