



第 11 课时 10 的加减法(教材第 61 页)



开心! 一练

一 看谁算得又对又快。

$10 - 5 =$

$5 + 5 =$

$10 - 9 =$

$4 + 6 =$

$10 - 2 =$

$8 + 2 =$

$10 - 8 =$

$10 - 6 =$

二 画一画, 填一填。

○○○○

$4 + \square = 10$

○○○

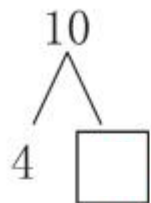
$3 + \square = 10$

○○○○○○

$6 + \square = 10$

三

1.

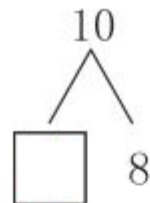


$$4 + \square = 10$$

$$10 - 4 = \square$$

$$10 - \square = \square$$

2.





$$\square + 8 = 10$$

$$10 - \square = 8$$

$$10 - \square = \square$$

四 写算式。

1.



$$\square + \square = \square$$

$$\square - \square = \square$$

$$\square + \square = \square$$

$$\square - \square = \square$$

2.



$$\square + \square = \square$$

$$\square - \square = \square$$

$$\square + \square = \square$$

$$\square - \square = \square$$



快乐!提升

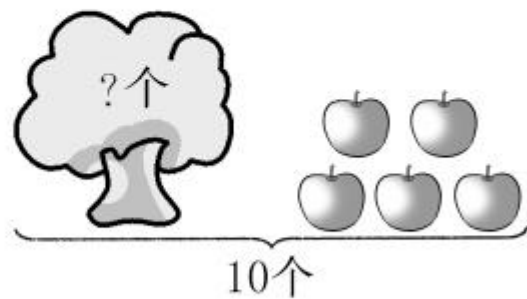
五 看图列式计算。

1.



$$\square \bigcirc \square = \square (\text{人})$$

2.



$$\square \bigcirc \square = \square (\text{个})$$