




8 20 以内的进位加法


第 1 课时 9 加几 (教材第 89 页)





开心！一练

一 想一想，填一填。



$$9 + 4 = \square$$

$$9 + 7 = \square$$

二 算一算，比一比。

$$9 + 1 + 4 =$$

$$9 + 5 =$$

$$9 + 1 + 8 =$$

$$9 + 9 =$$

$$9 + 1 + 2 =$$

$$9 + 3 =$$

$$9 + 1 + 6 =$$

$$9 + 7 =$$

三 想一想,算一算。


$$9 + \begin{array}{|c|} \hline 3 \\ \hline 2 \\ \hline 4 \\ \hline 6 \\ \hline \end{array} = \begin{array}{|c|} \hline \\ \hline \\ \hline \\ \hline \\ \hline \end{array}$$

$$9 + \begin{array}{|c|} \hline 5 \\ \hline 7 \\ \hline 9 \\ \hline 8 \\ \hline \end{array} = \begin{array}{|c|} \hline \\ \hline \\ \hline \\ \hline \\ \hline \end{array}$$



快乐!提升

四 看图列式计算。



$$\square + \square = \square$$

$$\square + \square = \square$$