



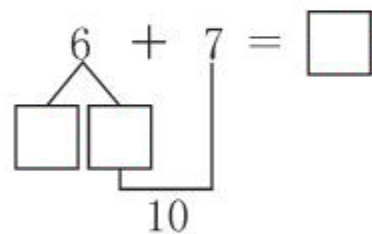
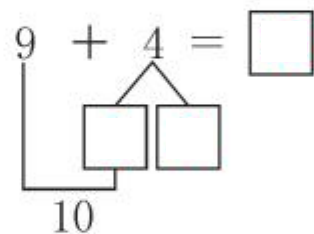
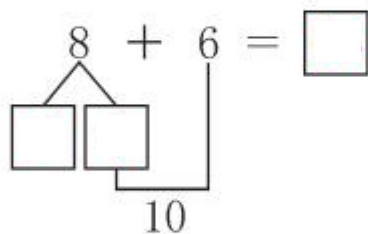
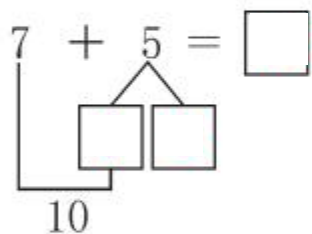
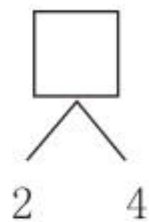
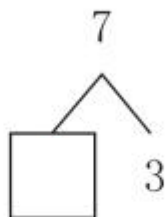
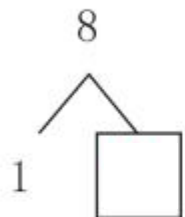
第 2 课时 20 以内的加减法





# 开心！一练

一 在□里填上合适的数。



二 算一算。

$9 + 4 =$

$17 - 5 =$

$13 + 5 =$

$7 - 5 + 9 =$

$10 - 6 =$

$8 + 6 =$

$10 - 8 =$

$6 + 8 - 3 =$

$7 + 8 =$

$9 + 8 =$

$10 + 9 =$

$8 - 2 + 7 =$

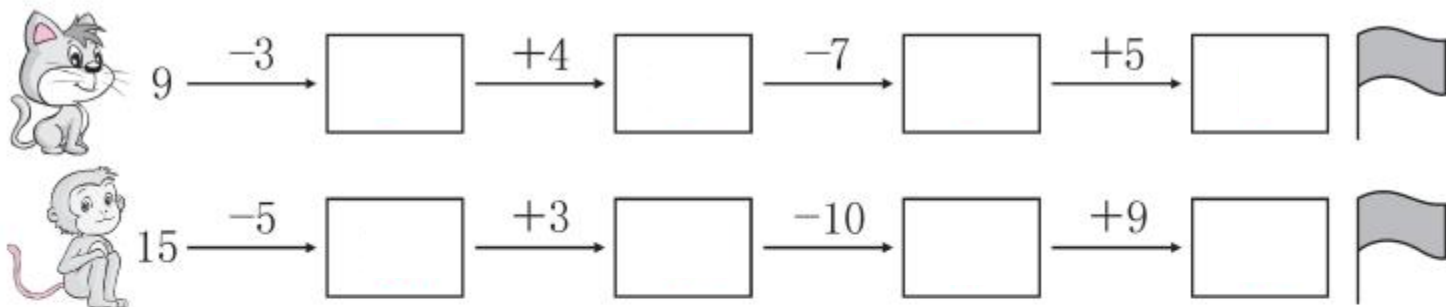
$5 - 5 =$

$12 + 4 =$

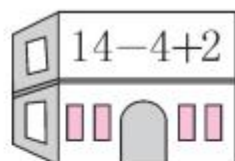
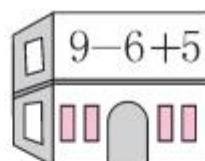
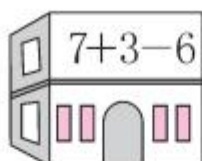
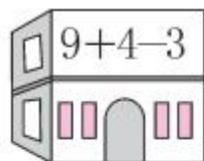
$12 - 10 =$

$4 + 9 - 3 =$

### 三 看谁跑得快。



### 四 连一连。



16-6-2



2+8+2



17-3-10



9-7+8

五 在○里填上“>”“<”或“=”。

$19 - 10 \bigcirc 9$

$2 + 9 \bigcirc 13$

$14 \bigcirc 5 + 8$

$17 - 5 \bigcirc 10$

$15 + 3 \bigcirc 17$

$10 \bigcirc 18 - 10$



### 快乐!提升

六 在□里填上合适的数。

$8 + \square = 14$

$9 + \square = 13$

$10 - \square = 5$

$7 + \square = 13$

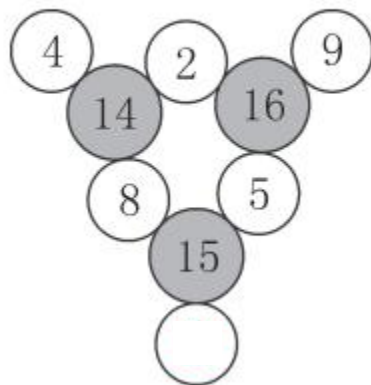
$\square - 3 = 6$

$6 + \square = 11$

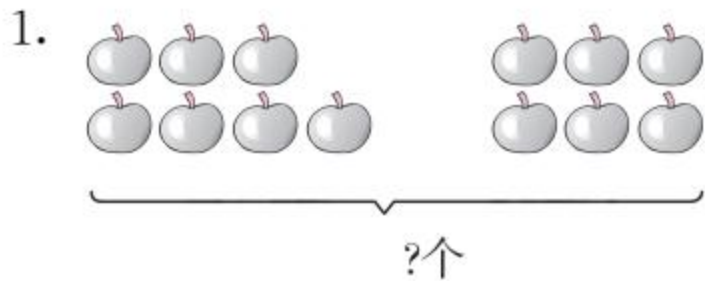
$6 + \square = 12$

$12 - \square = 2$

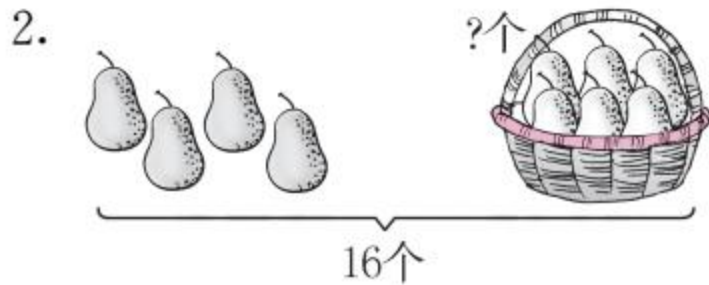
七 (河北保定市平顺县) 想一想, ○里应填什么数?



## 八 看图列式计算。



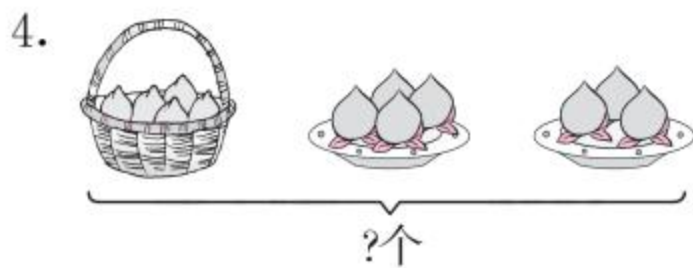
$$\square + \square = \square \text{ (个)}$$



$$\square - \square = \square \text{ (个)}$$



$$6 - \square + \square = \square \text{ (人)}$$



$$\square + \square + \square = \square \text{ (个)}$$



九  里可以填几?

$$9 + \square < 14$$

$$16 - \square > 10$$

$$12 + \square < 17$$

