







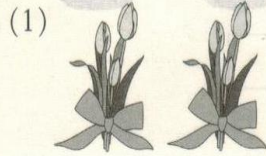
2. 用 2~6 的乘法口诀求商

第 1 课时 用 2~6 的乘法口诀求商

1. 细心算一算。



2. 看图列式, 用口诀计算。




$$3 \times 2 = \square$$

$$\square \div 3 = \square$$

$$\square \div 2 = \square$$

口诀: 三二得六




$$3 \times 4 = \square$$

$$\square \div 3 = \square$$

$$\square \div 4 = \square$$

口诀: 三四十二



(1) 一共有()只小狗。

$$\square \bigcirc \square = \square \text{ (只)}$$

(2) 每 4 只小狗住一个窝, 需要()个窝。

$$\square \bigcirc \square = \square \text{ (个)}$$

(3) 这些小狗平均住在 6 个窝里, 每个窝里住()只小狗。

$$\square \div \square = \square \text{ (只)}$$