

第2课时 认识直角、锐角和钝角

1. 算出两个数的和与差。




和: _____

差: _____




和: _____

差: _____



和: _____

差: _____



和: _____

差: _____

2. 小松鼠找食物。(连一连)



52-14



63-25+17



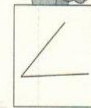
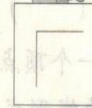
73-15-27



36+27+16



3. 小熊掰玉米。(连一连)



直角



锐角



钝角

