

④ 角的认识

第1课时 认识角

1. 细心算一算。

$27 + 22 =$

$48 - 6 =$

$48 - 25 =$

$25 + 5 =$

$90 - 78 =$

$28 + 54 =$

$74 - 42 =$

$18 + 63 =$

$31 - 6 =$

$17 + 28 =$

$75 - 56 =$

$36 - 27 =$

$87 - 62 =$

$13 + 26 =$

$23 + 42 - 35 =$

$54 - 6 - 15 =$

$81 + 18 - 22 =$

$57 - (34 + 18) =$

$95 - 37 - 27 =$

$9 + (40 - 25) =$

$35 + 31 =$

$78 - 5 =$

$92 - 73 =$

$92 - 81 =$

$26 + 18 =$

$52 + 27 =$


$35 + 47 =$

$15 + 72 - 44 =$

$62 + 19 + 9 =$

$50 + 26 - 47 =$

2. 下面图形中哪些是角？哪些不是？是的在括号里画“√”，不是的画“×”。



()



()




()



()




()



()


3. 下面图形各有几个角？



()个



()个



()个



()个