

A decorative illustration on the left side of the page. It features a large red fan (open on the left, closed on the right) with a branch of cherry blossoms extending from the top right. Below the fan, there is a cornucopia overflowing with various items, including a large pink flower, a golden cornucopia, and several smaller pink flowers. A red vertical line is positioned to the right of the fan and the cornucopia.

第 10 课时 练习课 [教材 P_{49~50}]



开心! 一练

一 算一算。

$70 + 2 =$

$48 - 8 =$

$66 - 6 =$

$39 - 9 =$

$27 - 20 =$

$54 - 4 =$

$5 + 60 =$

$95 - 90 =$

二



小猫一共要洗多少个盘子?



$$\square \bigcirc \square = \square \quad (\quad)$$


三 参加会议的有 49 人, 椅子够坐吗?





快乐提升

四



我们班有45人，如果每人一个座位，还差5个。

大巴车有多少个乘客座位？



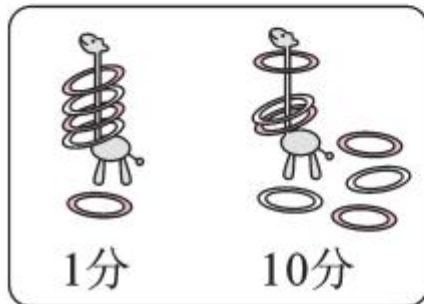
$$\square \bigcirc \square = \square \text{ ()}$$

五 套圈游戏。

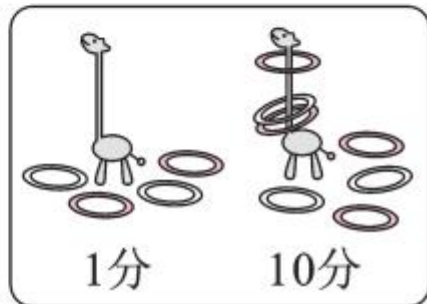
- 小明套了()分。
- 小红比小明少套了多少分？


$$\square \bigcirc \square = \square \text{ ()}$$

小明套圈情况



小红套圈情况





六 在 里填上适当的数。

$$28 = 20 + \square$$

$$60 = 63 - \square$$

$$98 = 90 + \square$$

$$36 = \square + \square$$

$$40 = 46 - \square$$

$$76 = \square + \square$$
