

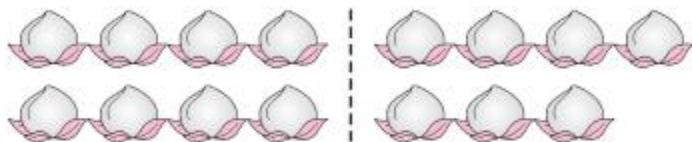


第 4 课时 十几减 7、6 [教材 P<sub>14</sub>]




# 开心! 一练

一 看图写出两道减法算式。



$$15 - \square = \square$$

$$15 - \square = \square$$



$$14 - \square = \square$$

$$14 - \square = \square$$

二

$$7 + 6 =$$

$$13 - 7 =$$

$$13 - 6 =$$

$$9 + 7 =$$

$$16 - 9 =$$

$$16 - 7 =$$

$$8 + 6 =$$

$$14 - 8 =$$

$$14 - 6 =$$

三

$$7 + \square = 12$$

$$12 - 7 = \square$$

$$\square + 6 = 11$$

$$11 - 6 = \square$$



$$7 + \square = 13$$

$$13 - 7 = \square$$



## 快乐提升

四 照样子,比一比看谁算得快!

	14	16	12	11	15	13	17
	7						
	8						

五 一共有 15 个萝卜，小白兔拔走了  个，还剩几个？



$$\square \bigcirc \square = \square (\text{个})$$



## 秒 算

$8+9=$

$14-9=$

$12-9=$

$15-8=$

$17-9=$

$12-8=$

$15-9=$

$13-9=$