



第 6 课时 十几减 5、4、3、2 [教材 P₁₇]



开心！一练

一 比一比，算一算。

$5 + \square = 12$

$3 + \square = 12$

$4 + \square = 11$

$\square + 4 = 12$

$12 - 5 = \square$

$12 - 3 = \square$

$11 - 4 = \square$

$12 - 4 = \square$

二

$11 - \begin{array}{|c|} \hline 2 \\ \hline 3 \\ \hline 4 \\ \hline \end{array} = \begin{array}{|c|} \hline \\ \hline \\ \hline \\ \hline \end{array}$

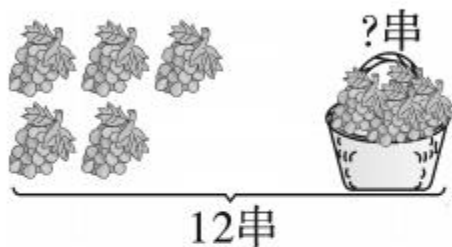
$12 - \begin{array}{|c|} \hline 3 \\ \hline 4 \\ \hline 5 \\ \hline \end{array} = \begin{array}{|c|} \hline \\ \hline \\ \hline \\ \hline \end{array}$

$13 - \begin{array}{|c|} \hline 4 \\ \hline 5 \\ \hline 6 \\ \hline \end{array} = \begin{array}{|c|} \hline \\ \hline \\ \hline \\ \hline \end{array}$

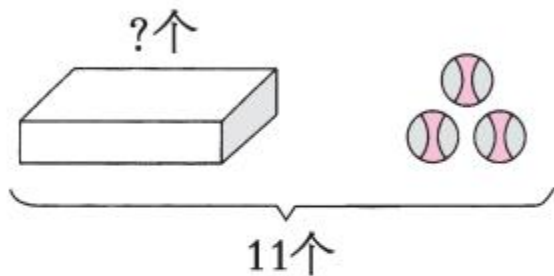


快乐!提升

三 看图列式计算。



$$\square \bigcirc \square = \square \text{ (串)}$$




$$\square \bigcirc \square = \square \text{ (个)}$$


四 妈妈买回苹果和梨共 12 个。



$$\square \bigcirc \square = \square \text{ ()}$$




五 用 1~9 这九个数填一填。你能组成多少组这样的算式？（每个算式只有 1 可以重复使用）


$$\boxed{1} \boxed{3} - \boxed{5} = \boxed{1} \boxed{7} - \boxed{9}$$

$$\boxed{} \boxed{} - \boxed{} = \boxed{} \boxed{} - \boxed{}$$

$$\boxed{} \boxed{} - \boxed{} = \boxed{} \boxed{} - \boxed{}$$

$$\boxed{} \boxed{} - \boxed{} = \boxed{} \boxed{} - \boxed{}$$

$$\boxed{} \boxed{} - \boxed{} = \boxed{} \boxed{} - \boxed{}$$




秒算

$5+7=$

$3+9=$

$11-6=$

$14-5=$

$7+2=$

$15-4=$

$4+8=$

$13-9=$