

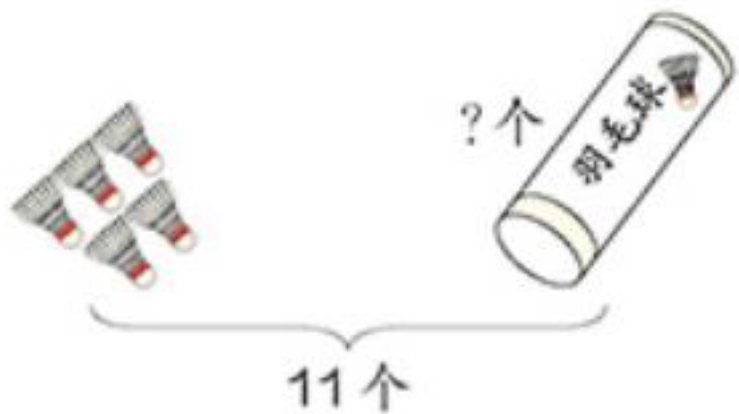
2

20以内的退位减法

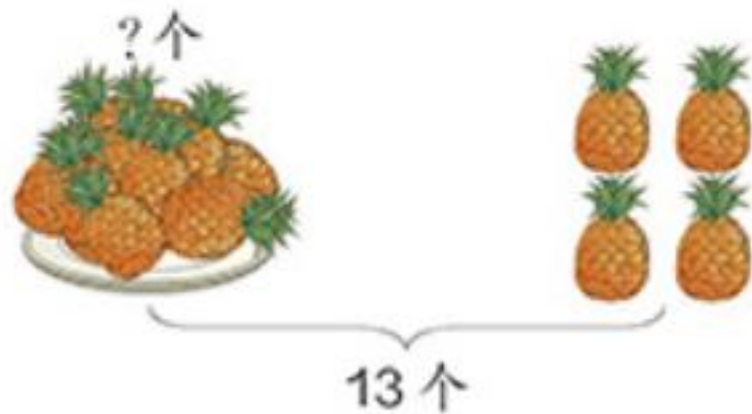
练习四



1.

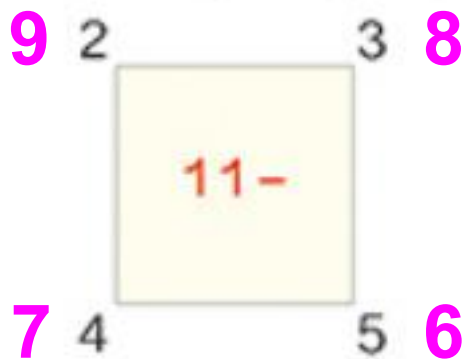


$$\boxed{11} - \boxed{5} = \boxed{6} \text{ (个)}$$



$$\boxed{13} - \boxed{4} = \boxed{9} \text{ (个)}$$

2. 先说得数，再写算式。

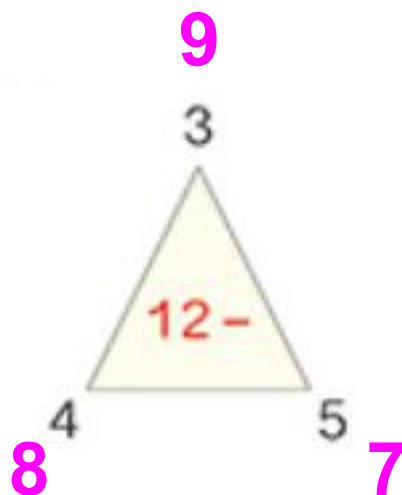


$$11 - 2 = 9$$

$$11 - 3 = 8$$

$$11 - 4 = 7$$

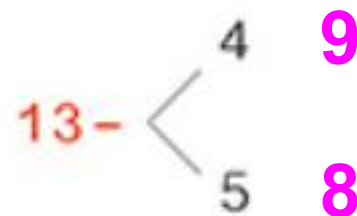
$$11 - 5 = 6$$



$$12 - 3 = 9$$

$$12 - 4 = 8$$

$$12 - 5 = 7$$



$$13 - 4 = 9$$

$$13 - 5 = 8$$

你有什么发现吗？

3.

$$11 - \begin{array}{|c|} \hline 3 \\ \hline 4 \\ \hline 5 \\ \hline \end{array} = \begin{array}{|c|} \hline 8 \\ \hline 7 \\ \hline 6 \\ \hline \end{array}$$

$$13 - \begin{array}{|c|} \hline 6 \\ \hline 7 \\ \hline 8 \\ \hline \end{array} = \begin{array}{|c|} \hline 7 \\ \hline 6 \\ \hline 5 \\ \hline \end{array}$$

$$15 - \begin{array}{|c|} \hline 7 \\ \hline 8 \\ \hline 9 \\ \hline \end{array} = \begin{array}{|c|} \hline 8 \\ \hline 7 \\ \hline 6 \\ \hline \end{array}$$

增大 减小

4.

12 只“小鸡”，我已捉住 5 只，还有几只？



$$12 - 5 = 7 \text{ (只)}$$

5. $11 - 3 = 8$

$12 - 8 = 4$

$13 - 4 = 9$

$12 - 6 = 6$

$11 - 2 = 9$

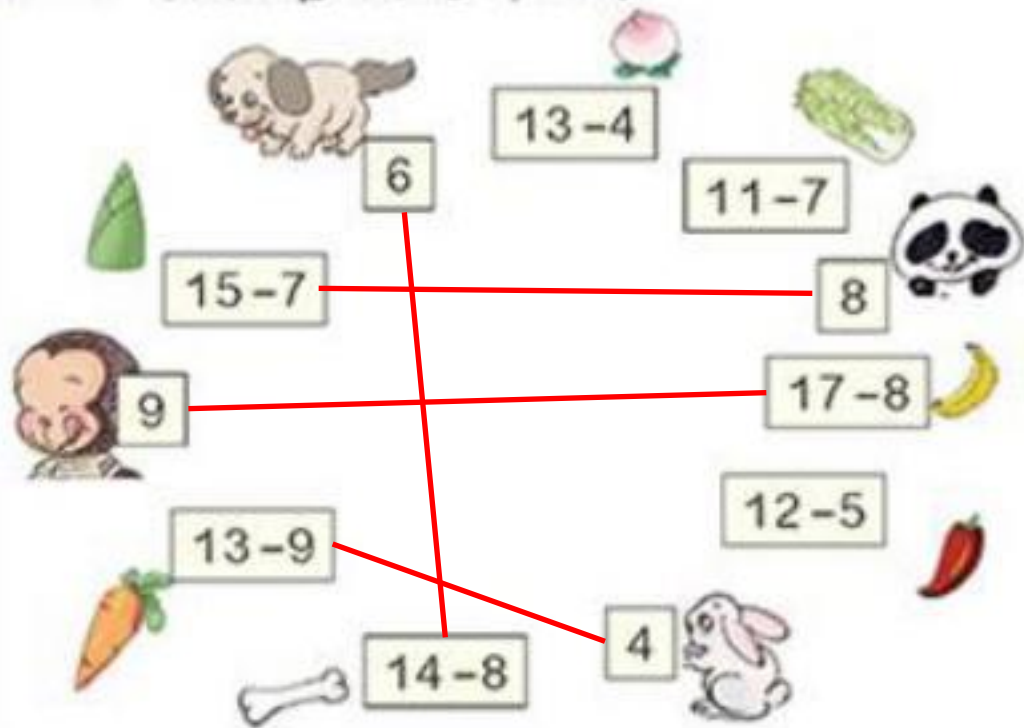
$12 - 9 = 3$

$13 - 7 = 6$

$14 - 5 = 9$

$19 - 8 = 11$

6. 小动物喜欢吃什么?



7. $4 + 8 + 6 = 18$

$11 - 3 - 3 = 5$

$15 - 7 + 6 = 14$

$5 + 4 + 7 = 16$

$8 + 7 - 9 = 6$

$19 - 5 - 8 = 6$

$12 - 4 + 5 = 13$

$17 - 2 + 4 = 19$

8. 下面每组算式卡片的得数相同,你能填出被遮住的数吗?

$(4) + 9$
 $6 + (7)$
 $5 + 8$

$$5 + 8 = 13$$

$$13 - 9 = 4$$

$$13 - 6 = 7$$

$7 + (2)$
 $(14) - 5$
 $11 - 2$

$$11 - 2 = 9$$

$$9 - 7 = 2$$

$$9 + 5 = 14$$

$12 - (4)$
 $(4) + 4$
 $15 - 7$

$$15 - 7 = 8$$

$$12 - 8 = 4$$

$$8 - 4 = 4$$

9.



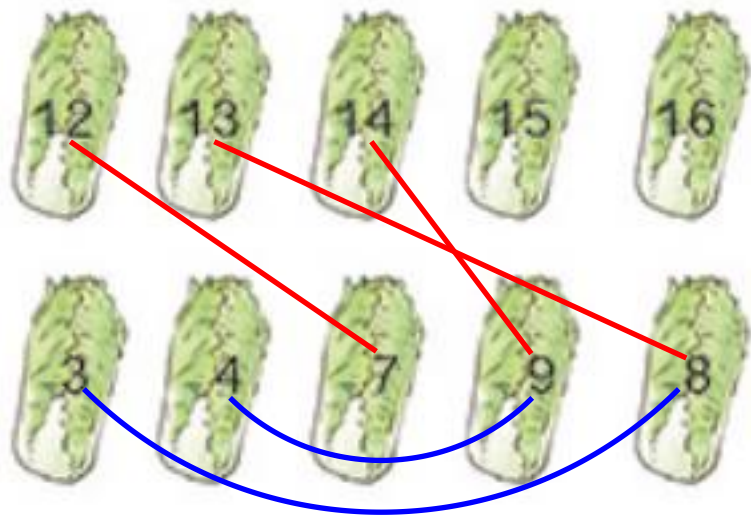
(1) 一共摘了 13 个桃子。
吃了 9 个, 还剩几个?

$$\boxed{13} - \boxed{9} = \boxed{4} (\text{个})$$

(2) 一共有 13 只猴子。树上
有 $\boxed{4}$ 只, 树下有几只?

$$\boxed{13} - \boxed{4} = \boxed{9} (\text{只})$$

10. 算一算，连一连。



我要选差是5
的两棵菜。

小兔可以选哪两棵白菜？

$$12-7=5$$

$$13-8=5$$

$$14-9=5$$

$$8-3=5$$

$$9-4=5$$