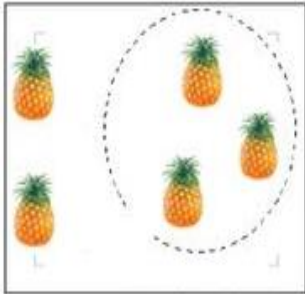


# 一年级数学培优拓展题

培优课堂，提分宝典，冲刺高分，成绩一路高

1.



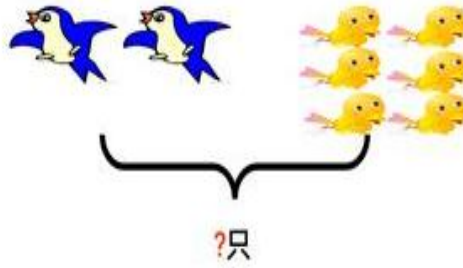
$$5 - \square = \square$$



$$\square + \square = \square$$



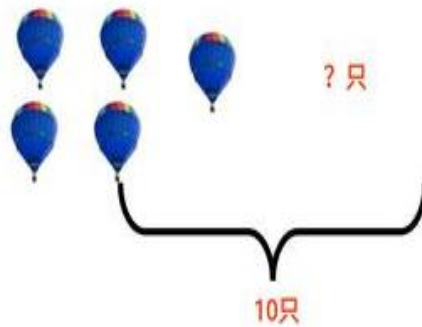
$$\square \bigcirc \square = \square$$



$$\square \bigcirc \square = \square$$



$$\square \bigcirc \square = \square$$

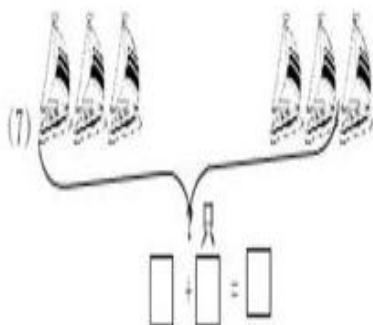



$$\square \bigcirc \square = \square$$




$$\square \bigcirc \square = \square$$

$$\square \bigcirc \square = \square$$

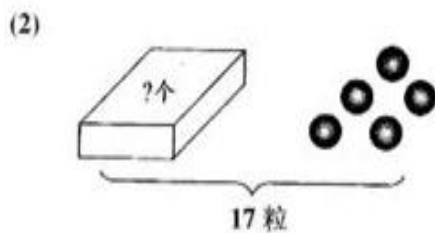


3、

$$\square \bigcirc \square \bigcirc \square = \square$$



$$\square \bigcirc \square = \square \text{ (个)}$$



$$\square \bigcirc \square = \square \text{ (粒)}$$

(1)

$$\square \bigcirc \square = \square$$

(2)

$$\square \bigcirc \square = \square$$

(3)

现在有几辆汽车?

$$\square \bigcirc \square = \square$$

(4)

现在有几辆汽车?

$$\square \bigcirc \square = \square$$

(8)


$$\square - \square = \square$$

(9) 一共有几座房子?

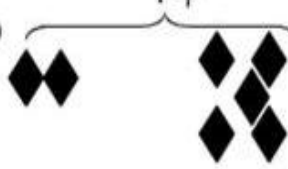
$$\square \bigcirc \square = \square$$


(10) 房子里有几只鸭子?


$$\square \bigcirc \square = \square$$


(3)    
 9个   
 $\square \bigcirc \square = \square$


(4)    
 8只   
 $\square \bigcirc \square = \square$

(5)    
 ?个   
 $\square \bigcirc \square = \square$

(6)    
 9只   
 $\square \bigcirc \square = \square$

   
 ?个   
 $\square \bigcirc \square = \square$


   
 $\square \bigcirc \square = \square$



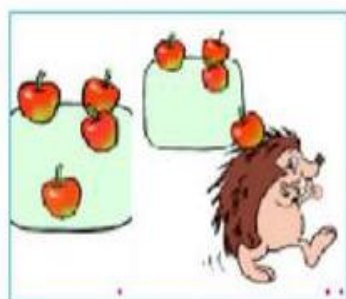
$$1 + 2 = \square$$



$$5 - \square = \square$$



$$3 + \square = \square$$

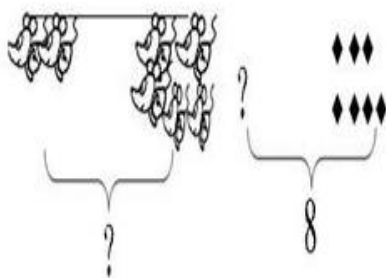


$$\square - \square = \square$$



5人

$$\square \bigcirc \square = \square$$



$$\square \bigcirc \square = \square$$

$$\square \bigcirc \square = \square$$

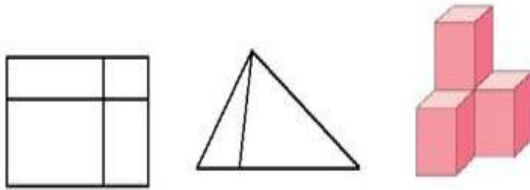


1、从左边起涂颜色。

涂 2 个： ☆ ☆ ☆ ☆ ☆

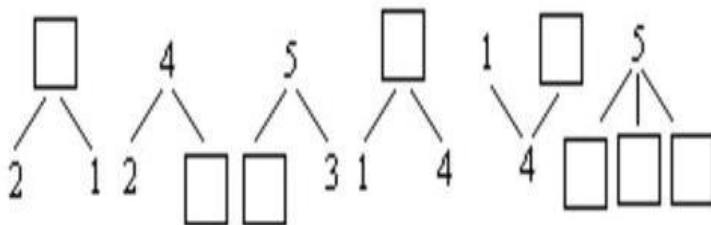
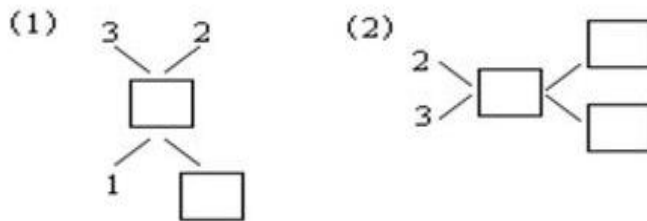
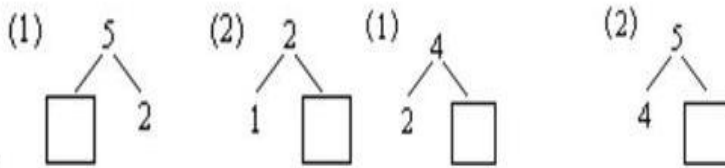
涂第 2 个： ☆ ☆ ☆ ☆ ☆

2、请你试一试。



( ) 个正方形 ( ) 个三角形 ( ) 个正方体

3、






4. 看图列式计算.



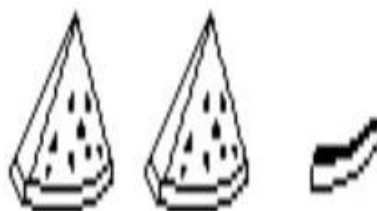
$$\square \bigcirc \square = \square$$



$$\square \bigcirc \square = \square$$



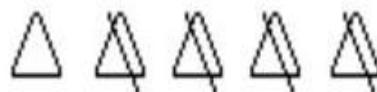
$$\square \bigcirc \square = \square$$



$$\square \bigcirc \square = \square$$



$$\square \bigcirc \square = \square$$





$$\square \bigcirc \square = \square$$





$$\square \bigcirc \square = \square$$

$$\square \bigcirc \square = \square$$



$$\square \bigcirc \square = \square$$

$$\square \bigcirc \square = \square$$

※※※


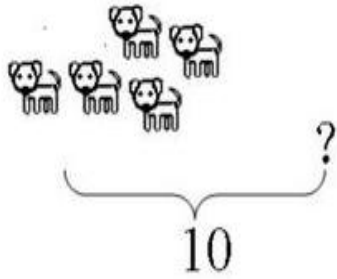
※※※※※※※

$$\underline{\quad} + \underline{\quad} = \underline{\quad}$$

$$\underline{\quad} + \underline{\quad} = \underline{\quad}$$

$$\underline{\quad} - \underline{\quad} = \underline{\quad}$$

$$\underline{\quad} + \underline{\quad} = \underline{\quad}$$

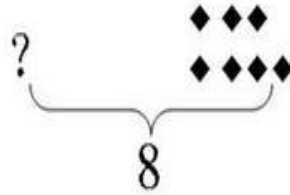
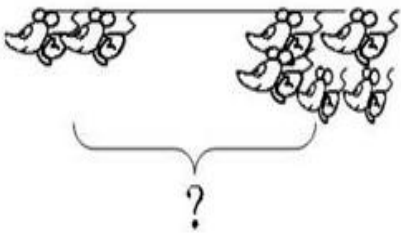


---

 $\square \bigcirc \square = \square$

---

 $\square \bigcirc \square = \square$

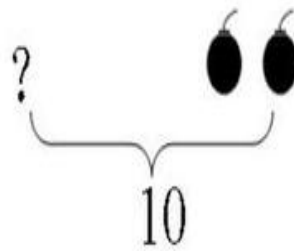
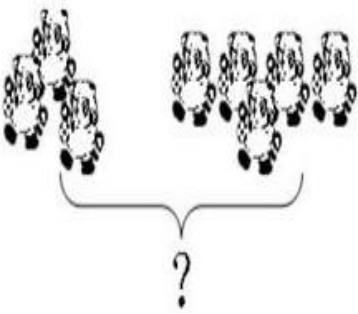


---

 $\square \bigcirc \square = \square$

---

 $\square \bigcirc \square = \square$

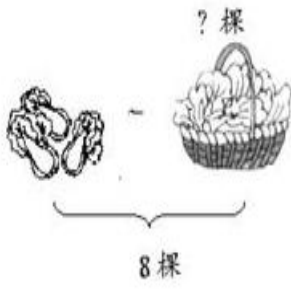


---

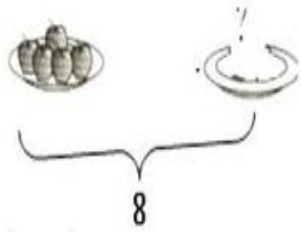
 $\square \bigcirc \square = \square$

---


 $\square \bigcirc \square = \square$




$$\square \bigcirc \square = \square$$


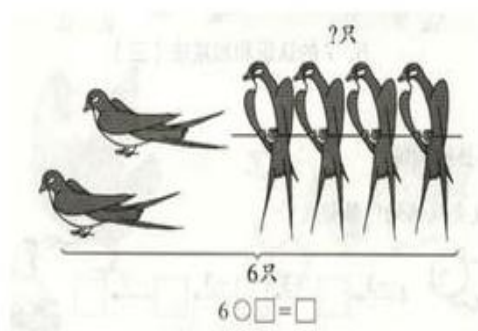


$$8 \bigcirc \square = \square$$



$$\square \bigcirc \square = \square$$

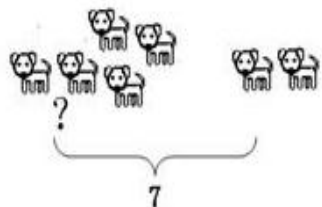




$$\square \bigcirc \square = \square$$



$$\square \bigcirc \square = \square$$



$$\square \bigcirc \square = \square$$

## 一年级上册数学画图、看图列式练习

班级：\_\_\_\_\_ 姓名：\_\_\_\_\_

### 一、 按要求画一画

1、画□，比△多2个。



\_\_\_\_\_

2、画△，比□少3个。



\_\_\_\_\_

3、画☆，比△多1个。



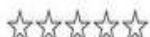
\_\_\_\_\_

4、画○，比□少4个。




\_\_\_\_\_

5、画♂，比☆多4个。



\_\_\_\_\_

6、画○，比♡少2个。



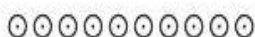
\_\_\_\_\_

7、画☆和☺一样多。



\_\_\_\_\_

8、画□，比○少5个。



\_\_\_\_\_


### 二、 数一数，填一填。



○比☆多( )个。

☆比○少( )个

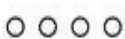
□ ○ □ = □



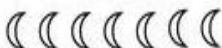
⚙比○少( )个。

○比⚙多( )个。

□ ○ □ = □


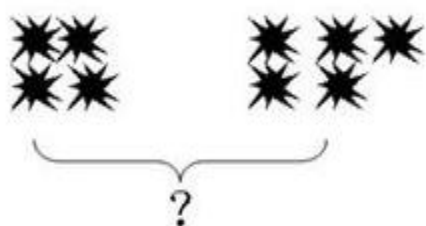


( )比( )多( )个。



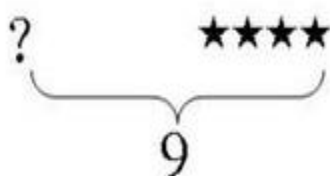
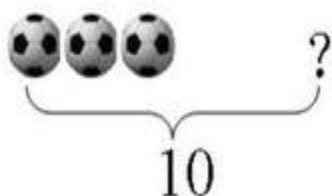
( )比( )少( )个。

□ ○ □ □



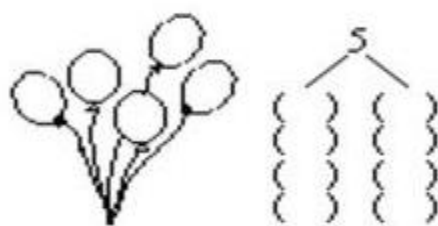
$$\square \bigcirc \square = \square$$

$$\square \bigcirc \square = \square$$




$$\square \bigcirc \square = \square$$

$$\square \bigcirc \square = \square$$




6、把 5 个气球分成 2 把，有几种分法？



$$6 + \square = \square$$

$$\square + \square = \square$$



$$8 - 2 = \square$$

$$\square - \square = \square$$

$$\square \bigcirc \square = \square$$

=


△△△△△  
□□□□□□□  
( ) 比 ( ) 多 ( ) 个。


$$\square \bigcirc \square = \square$$


○○○○○○○○○○  
□□□□□  
( ) 比 ( ) 少 ( ) 个。

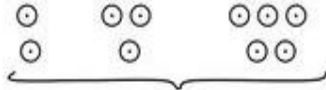
$$\square \bigcirc \square = \square$$

三、 看图写算术。


1、  ?  
 $\square \bigcirc \square = \square$


2、  ?  
 $\square \bigcirc \square = \square$

3、  ?  
 $\square \bigcirc \square = \square$

4、  ?  
 $\square \bigcirc \square = \square$

5、   
 $\square \bigcirc \square = \square$

  
 $\square \bigcirc \square = \square$

7、   
 $\square \bigcirc \square = \square$

8、   
 $\square \bigcirc \square = \square$



1、

\_\_\_\_\_

\_\_\_\_\_

2、○○○○○

○○○

3、



\_\_\_\_\_

\_\_\_\_\_

4、



\_\_\_\_\_

\_\_\_\_\_

看图列式

一、数一数，填一填。



1、从后往前数，小狗是第（ ）个，小猴是第（ ）个，小猫是第（ ）个。

2、一共有（ ）只小动物？

（ ）○（ ）=（ ）（只）



1、

\_\_\_\_\_

\_\_\_\_\_

2、○○○○○ ○○○



3、

\_\_\_\_\_

\_\_\_\_\_

4、

\_\_\_\_\_

\_\_\_\_\_

看图列式


一、数一数，填一填。




1、从后往前数，小狗是第（ ）个，小猴是第（ ）个，小猫是第（ ）个。

2、一共有（ ）只小动物？

（ ）○（ ）=（ ）（只）



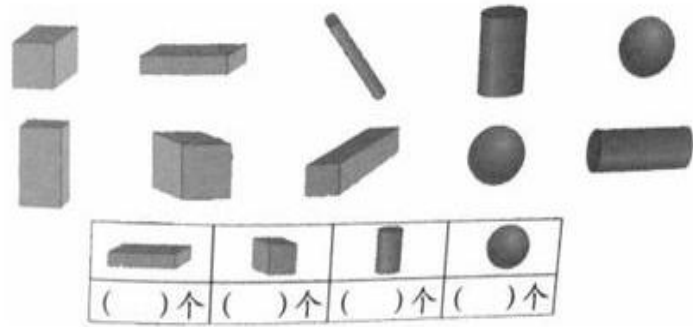
- 1、有 ( ) 只小熊在拔河。有 ( ) 只小熊在跳绳。
- 2、一共有 ( ) 只小熊。 ( ) ( ) ( ) = ( ) (只)



- 1、一共有 ( ) 盆花。从左边数，第四盆有 ( ) 朵，最右边一盆有 ( ) 朵。
  - 2、从左边数，有六朵花的是第 ( ) 盆，它左边的一盆有 ( ) 朵，右边的一盆有 ( ) 朵。
- 二、数一数，填一填。



12 和 17 两个数，( ) 接近 10，( ) 接近 20。



男生有 ( ) 人，女生有 ( ) 人，一共有 ( ) 人。

$$( ) + ( ) = ( ) \text{ (人)}$$

三、逛超市。